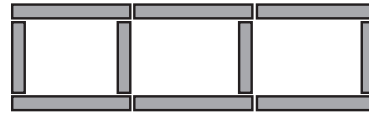
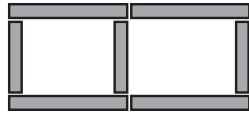
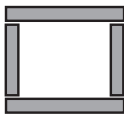


# Windows

Name \_\_\_\_\_



<b>Step</b>	1	2	3	4	5	6	7		20
<b>No. of sticks</b>	4	7	10						

Describe the pattern you see in the drawing:

---



---



---

Describe the pattern you see in the table:

---



---



---

Describe how you can find the number of sticks in the 20<sup>th</sup> step:

---



---



---



---



---

*Windows—66*